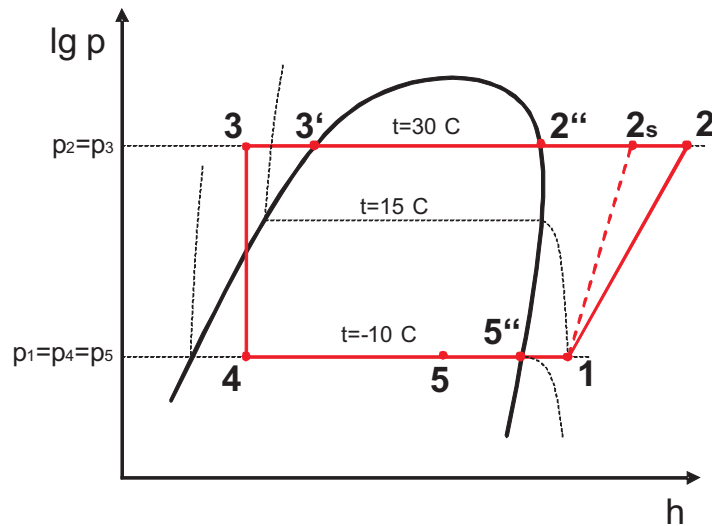


Musterlösung Aufgabe 1: «Kompressionskälteprozess»

I. TEILAUFGABE A) ⇒ 4 PUNKTE



II. TEILAUFGABE B) ⇒ 5 PUNKTE

$$P_{12} = \dot{m} \cdot w_{t12}$$

$$w_{t12} = \frac{w_{t12s}}{\eta_{s,v}} = \frac{h_{2s} - h_1}{\eta_{s,v}}$$

$$h_1 = h_{5''} + c_p \cdot (T_1 - T_{5''}) = 307,8 \left(\frac{kJ}{kg} \right) + 0,7360 \left(\frac{kJ}{kg \cdot K} \right) \cdot (15 - (-10)) K = 326,2 \left(\frac{kJ}{kg} \right)$$

$$s_{2s} = s_1 = s_{5''} + \Delta s_{5'',1} = s_{5''} + c_p \cdot \ln \left(\frac{T_1}{T_{5''}} \right) =$$

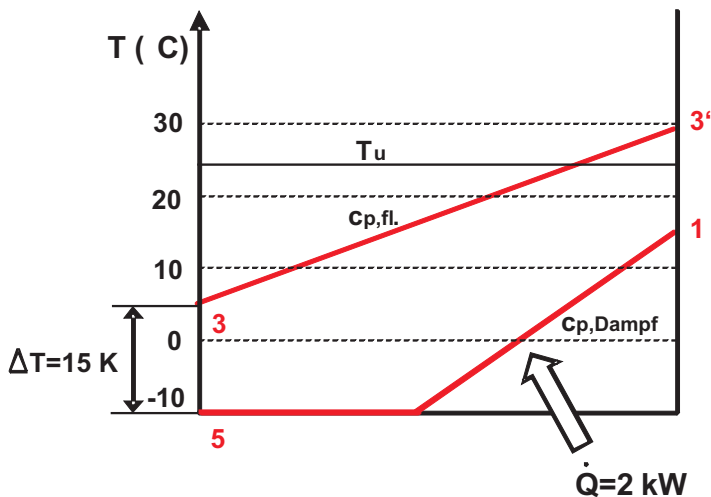
$$= 1,411 \left(\frac{kJ}{kg \cdot K} \right) + 0,7360 \left(\frac{kJ}{kg \cdot K} \right) \cdot \ln \left(\frac{288,15}{263,15} \right) = 1,478 \left(\frac{kJ}{kg \cdot K} \right)$$

$$s_{2s} = s_{2''} + \Delta s_{2'',2s} = s_{2''} + c_p \cdot \ln \left(\frac{T_{2s}}{T_{2''}} \right) \Rightarrow \ln \left(\frac{T_{2s}}{T_{2''}} \right) = \frac{s_{2s} - s_{2''}}{c_p} \Rightarrow$$

$$T_{2s} = T_{2''} \cdot \exp \left(\frac{s_{2s} - s_{2''}}{c_p} \right) = 303,15 (K) \cdot \exp \left(\frac{1,478 \left(\frac{kJ}{kg \cdot K} \right) - 1,449 \left(\frac{kJ}{kg \cdot K} \right)}{0,8363 \left(\frac{kJ}{kg \cdot K} \right)} \right) = 313,47 K = 40,32 \text{ } ^\circ C$$

$$h_{2s} = h_{2''} + c_p \cdot (T_{2s} - T_{2''}) = 332,4 \left(\frac{kJ}{kg} \right) + 0,8363 \left(\frac{kJ}{kg \cdot K} \right) \cdot (40,32 - 30) K = 341,03 \left(\frac{kJ}{kg} \right)$$

$$P_{12} = 2,5 \left(\frac{kg}{s} \right) \cdot \frac{\left(341,03 \left(\frac{kJ}{kg} \right) - 326,2 \left(\frac{kJ}{kg} \right) \right)}{0,75} = \boxed{49,43 \text{ kW}}$$



III. TEILAUFGABE C) ⇒ 4 PUNKTE

$$\dot{Q}_{3',3} = \dot{m} \cdot \Delta h = \dot{m} \cdot c_{p,fl.} \cdot \Delta T = \frac{2,5 \left(\frac{kg}{s}\right)}{10} \cdot 1,127 \left(\frac{kJ}{kg \cdot K}\right) \cdot (-25K) = -7,044 \text{ kW}$$

$$\dot{Q}_{51} = \dot{Q} - \dot{Q}_{3',3} = (2 - (-7,044)) \text{ (kW)} = 9,044 \text{ kW}$$

$$\dot{Q}_{51} = \dot{m} \cdot \Delta h_{51}$$

$$\Rightarrow \Delta h_{51} = \frac{\dot{Q}_{51}}{\dot{m}} = \frac{9,044 \text{ (kW)}}{0,25 \left(\frac{kg}{s}\right)} = 36,176 \left(\frac{kJ}{kg}\right)$$

$$h_5 = h_1 - \Delta h_{51} = 326,2 \left(\frac{kJ}{kg}\right) - 36,176 \left(\frac{kJ}{kg}\right) = 290,024 \left(\frac{kJ}{kg}\right)$$

$$h_4 = h_3 = h_{3'} - c_p \cdot \Delta T_{3,3'} = 232,7 \left(\frac{kJ}{kg}\right) - 1,127 \left(\frac{kJ}{kg \cdot K}\right) \cdot 25K = 204,525 \left(\frac{kJ}{kg}\right)$$

$$\dot{Q}_{zu} = \dot{m} \cdot \Delta h_{45} = 0,25 \left(\frac{kg}{s}\right) \cdot (290,024 \left(\frac{kJ}{kg}\right) - 204,525 \left(\frac{kJ}{kg}\right)) = \boxed{21,375 \text{ kW}}$$

$$x_5 = \frac{h_5 - h'_5}{h''_5 - h'_5} = \frac{290,024 \left(\frac{kJ}{kg}\right) - 189,6 \left(\frac{kJ}{kg}\right)}{307,8 \left(\frac{kJ}{kg}\right) - 189,6 \left(\frac{kJ}{kg}\right)} = \boxed{85\%}$$

IV. TEILAUFGABE D) ⇒ 1 PUNKTE

$$\epsilon_{KM} = \frac{\text{Nutzen}}{\text{Aufwand}} = \frac{k \cdot \dot{Q}_{zu}}{P_{12}} = \frac{10 \cdot 21,375}{49,43} = \boxed{4,32}$$

Musterlösung Aufgabe 2: «Entsalzungsanlage»

I. TEILAUFGABE B) ⇒ 3 PUNKTE

$$h_{1+x,L1} = 1400 \text{ kJ/kg (aus Diagramm)}$$

$$h_{1+x,L2} = h_{1+x,L3} + \Delta x \cdot h_w = 130 + (0,5 - 0,037) \cdot c_{pw} \cdot t_w = (130 + 67,8) \frac{\text{kJ}}{\text{kg}} = 197,8 \frac{\text{kJ}}{\text{kg}}$$

II. TEILAUFGABE C) ⇒ 3 PUNKTE

$$\dot{m}_{w1} \cdot \Delta h_w = -\dot{m}_{tr} \cdot \Delta h_{1+x,L1-L2}$$

$$\dot{m}_{w1} = \dot{m}_{trL} \cdot \frac{1400 - 198}{4,192 \cdot 45} = 6,377 \cdot \dot{m}_{trL} = \frac{6,377 \text{ kg}}{0,925 \text{ m}^3} \cdot \dot{V} = 6,894 \frac{\text{kg}}{\text{m}^3} \cdot \dot{V}$$

$$\dot{m}_{trL} = \frac{\dot{V}}{v_{1+x}} = 1,081 \frac{\text{kg}}{\text{m}^3} \cdot \dot{V}$$

$$v_{1+x} = \frac{T \cdot R_m}{p} \cdot \left(\frac{1}{M_L} + \frac{x}{M_D} \right) = \frac{308,15 \text{ K} \cdot 8,314472 \frac{\text{J}}{\text{mol K}}}{1,01325 \text{ bar}} \cdot \left(\frac{1}{28,96} + \frac{0,037}{18,015} \right) = 0,925 \frac{\text{m}^3}{\text{kg}}$$

$$\dot{m}_{W1, \text{mit Heatpipe}} = \frac{1}{4} \cdot 6,894 \frac{\text{kg}}{\text{m}^3} \cdot \dot{V} = 1,724 \frac{\text{kg}}{\text{m}^3} \cdot \dot{V}$$

$$\dot{m}_{Kond} = \dot{m}_{trL} \cdot \Delta x = \frac{\dot{V}}{v_{1+x}} \cdot \Delta x = \frac{0,463 \text{ kg/kg}}{0,925 \text{ m}^3/\text{kg}} \cdot \dot{V} = 0,5005 \frac{\text{kg}}{\text{m}^3} \cdot \dot{V}$$

III. TEILAUFGABE D) ⇒ 4 PUNKTE

Massebilanz: $\dot{m}_{W3} = \dot{m}_{W4} + \Delta \dot{m}_W$; wobei: $\Delta \dot{m}_W = \dot{m}_{trL} \cdot \Delta x$

Enthalpiebilanz:

$$\dot{H}_{W3} - \dot{H}_{W4} + Q + \dot{H}_{L3} - \dot{H}_{L1} = 0$$

$$\dot{m}_{W3} \cdot h_{W3} - \dot{m}_{W4} \cdot h_{W4} + Q + \dot{m}_L \cdot (h_{1+x,3} - h_{1+x,1}) = 0$$

$$\dot{m}_{W3} \cdot h_{W3} - (\dot{m}_{W3} - \Delta x \cdot \dot{m}_{trL}) \cdot h_{W4} + \dot{m}_{trL} \cdot (h_{1+x,3} - h_{1+x,1}) + Q = 0$$

$$\begin{aligned} h_3 &= \frac{1}{\dot{m}_{W3}} \cdot [(\dot{m}_{W3} - \dot{m}_{trL} \cdot \Delta x) \cdot h_{W4} - \dot{m}_{trL} \cdot (h_{1+x,3} - h_{1+x,1}) - Q]; \quad \text{wobei: } Q = 3/4 \cdot \dot{m}_{trL} \cdot \Delta h_{1+x,1-2} \\ &= \frac{1}{1,724} \cdot [(1,724 - 0,5005) \cdot 4,192 \cdot 45 - 1,081 \cdot (130 - 1400) - 1,081 \cdot (1400 - 198)] \\ &= \frac{1,224}{1,724} \cdot 4,192 \cdot 45 + \frac{1,081}{1,724} \cdot (1270 - \frac{3}{4} \cdot 1202) = 365 \frac{\text{kJ}}{\text{kg}} \end{aligned}$$

$$h_3 = c_p \cdot t_{W3} \rightarrow t_{W3} = \frac{365 \text{ kJ/kg}}{4,192 \text{ kJ/kgK}} = 87,07 \text{ }^\circ\text{C}$$

IV. TEILAUFGABE E) \Rightarrow 2 PUNKTE

$$\dot{Q}_{\text{Kollektor}} = \dot{m}_{W3} \cdot c_p \Delta t_{W2, W3} = 1,724 \frac{\text{kg}}{\text{m}^3} \cdot \dot{V} \cdot 4,192 \cdot 17,074 = 123,4 \frac{\text{kJ}}{\text{m}^3} \cdot \dot{V}$$

$$\frac{\dot{Q}_{\text{Kollektor}}}{\dot{m}_{\text{Dest}}} = \frac{123,4}{0,5005} = 246,5 \frac{\text{kJ}}{\text{kg}}$$

V. TEILAUFGABE F) \Rightarrow 6 PUNKTE

L1:

$$p_{S, L1} = \exp\left[11,93255 - \frac{3970,148}{353,15 - 40,052}\right] = 0,4735 \text{ bar}$$

$$p_{H_2O, L1} = \varphi_{L1} \cdot p_{S, L1} = 0,4498 \text{ bar}$$

$$x_{L1} = \frac{p_{H_2O, L1}}{(p_{ges} - p_{H_2O, L1})} \cdot \frac{M_{H_2O}}{M_L} = \frac{0,4498}{(1,01325 - 0,4498)} \cdot \frac{18,015}{28,96} = 0,497 \frac{\text{kg}}{\text{kg}}$$

$$h_{1+x, L1} = (1,004 \cdot 80) \frac{\text{kJ}}{\text{kg}} + 0,497 \cdot (2500 + 1,86 \cdot 80) \frac{\text{kJ}}{\text{kg}} = 1395,7 \frac{\text{kJ}}{\text{kg}}$$

L2:

$$p_{S, L2} = \exp\left[11,93255 - \frac{3970,148}{308,15 - 40,052}\right] = 0,0564 \text{ bar}$$

$$p_{H_2O, L2} = \varphi_{L2} \cdot p_{S, L2} = 0,0564 \text{ bar}$$

$$x_{L2} = \frac{p_{H_2O, L2}}{(p_{ges} - p_{H_2O, L2})} \cdot \frac{M_{H_2O}}{M_L} = \frac{0,0564}{(1,01325 - 0,0564)} \cdot \frac{18,015}{28,96} = 0,0366 \frac{\text{kg}}{\text{kg}}$$

$$h_{1+x, L1} = (1,004 \cdot 35) \frac{\text{kJ}}{\text{kg}} + 0,0366 \cdot (2500 + 1,86 \cdot 35) \frac{\text{kJ}}{\text{kg}} + (0,497 - 0,0366) \cdot (4,192 \cdot 35) \frac{\text{kJ}}{\text{kg}} = 196,51 \frac{\text{kJ}}{\text{kg}}$$

Musterlösung Aufgabe 3: «Verbrennung» ⇒ 15 Punkte

$$\Delta^U h_{[pro\ kg]} = 5 \frac{kW \cdot h}{kg_{HP}} = 5 \cdot 3600 \frac{kW \cdot s}{kg_{HP}} = 18 \frac{MJ}{kg_{HP}}$$

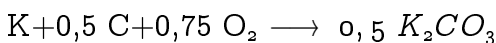
$$\nu_{HP,i} = \frac{\dot{n}_{HP,i}}{\dot{m}_{HP}} \quad \text{mit} \quad \dot{n}_{HP,i} = \frac{\dot{m}_{HP,i}}{M_i} \quad \Rightarrow \quad \nu_{HP,i} = \frac{\dot{m}_{HP,i}}{\dot{m}_{HP} M_i}$$

$$\text{mit} \quad \dot{m}_{HP,i} = \zeta_{HP,i} \cdot \dot{m}_{HP} \quad \Rightarrow \quad \nu_{HP,i} = \frac{\zeta_{HP,i} \cdot \dot{m}_{HP}}{\dot{m}_{HP} M_i} = \frac{\zeta_{HP,i}}{M_i}$$

$$\Rightarrow \nu_{HP,C} = \frac{\zeta_{HP,C}}{M_C} = \frac{0,5 \frac{kg_C}{kg_{HP}}}{12 \frac{g_C}{mol_C}} = 41,6667 \frac{mol_C}{kg_{HP}} ;$$

$$\nu_{HP,H_2} = 29,8954 \frac{mol_{H_2}}{kg_{HP}} ; \quad \nu_{HP,O_2} = 13,125 \frac{mol_{O_2}}{kg_{HP}} ; \quad \nu_{HP,N_2} = 0,357 \frac{mol_{N_2}}{kg_{HP}} ; \quad \nu_{HP,K} = 0,2558 \frac{mol_K}{kg_{HP}}$$


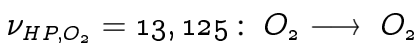
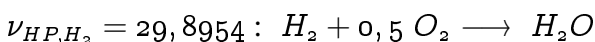
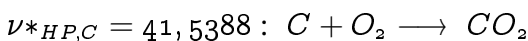
Vollständige Verbrennung der einzelnen Komponenten der Holzpellets:



Für die Umwandlung von $0,2558 \frac{mol_K}{kg_{HP}}$ K zu $(0,2558 \frac{mol_K}{kg_{HP}} \cdot 0,5 \frac{mol_{K_2CO_3}}{mol_K} = 0,1279 \frac{mol_{K_2CO_3}}{kg_{HP}})$ K_2CO_3 wird $(0,2558 \frac{mol_K}{kg_{HP}} \cdot 0,5 \frac{mol_C}{mol_K} = 0,1279 \frac{mol_C}{kg_{HP}})$ C und $(0,2558 \frac{mol_K}{kg_{HP}} \cdot 0,75 \frac{mol_{O_2}}{mol_K} = 0,1919 \frac{mol_{O_2}}{kg_{HP}})$ O_2 benötigt.

Das übrige C reagiert zu CO_2 :

$$\nu^*_{HP,C} = \nu_{HP,C} - 0,1279 \frac{mol_C}{kg_{HP}} = 41,5388 \frac{mol_C}{kg_{HP}}$$



Es verbrennen C, K und H_2 . Hierfür wird O_2 benötigt:

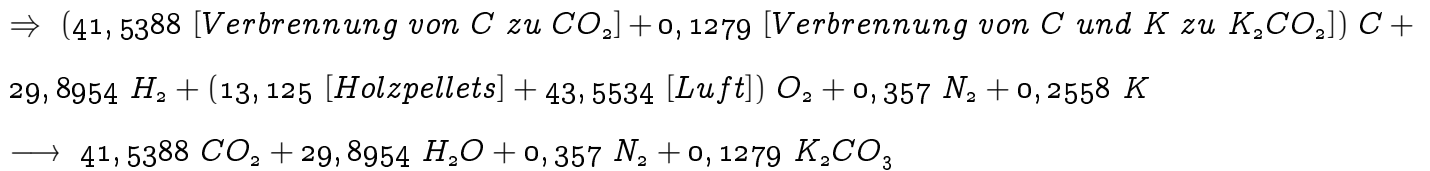
$$\Rightarrow O_{2,V} = (41,5388 + 29,8954 \cdot 0,5 + 0,2558 \cdot 0,75) O_2 = 56,6784 O_2$$

In den Holzpellets befindet sich bereits O_2 :

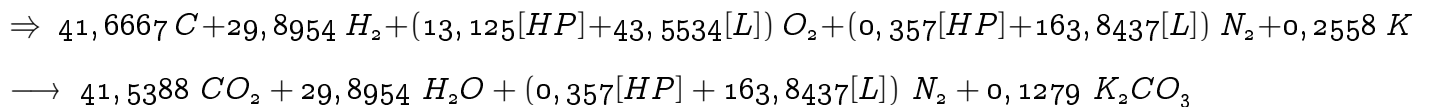
$$\Rightarrow O_{2,HP} = 13,125 O_2$$

Das fehlende O_2 wird durch $O_{2,L}$ aus der Luft geliefert:

$$\Rightarrow O_{2,V} = O_{2,HP} + O_{2,L} \quad \Rightarrow \quad O_{2,L} = O_{2,V} - O_{2,HP} = 43,5534 O_2$$



$$N_{2,L} = 43,5534 \frac{\text{mol}_{O_2}}{\text{kg}_{HP}} \cdot \frac{0,79 \frac{\text{mol}_{N_2}}{\text{mol}_L}}{0,21 \frac{\text{mol}_{O_2}}{\text{mol}_L}} = 163,8437 \frac{\text{mol}_{N_2}}{\text{kg}_{HP}}$$



I. TEILAUFGABE A) \Rightarrow 3 PUNKTE

gesucht: $\psi_{HP,i}$, $\Delta^U h_{[pro \ mol]}$

$$\psi_{HP,i} = \frac{\dot{n}_{HP,i}}{\dot{n}_{HP}} = \frac{\nu_{HP,i} \cdot \dot{m}_{HP}}{\Sigma(\dot{n}_{HP,i})} = \frac{\nu_{HP,i} \cdot \dot{m}_{HP}}{\Sigma(\nu_{HP,i} \cdot \dot{m}_{HP})} = \frac{\nu_{HP,i} \cdot \dot{m}_{HP}}{\Sigma(\nu_{HP,i}) \cdot \dot{m}_{HP}} = \frac{\nu_{HP,i}}{\Sigma(\nu_{HP,i})}$$

$$\Sigma(\nu_{HP,i}) = \nu_{HP,C} + \nu_{HP,H_2} + \nu_{HP,O_2} + \nu_{HP,N_2} + \nu_{HP,K}$$

$$\Rightarrow \Sigma(\nu_{HP,i}) = 41,6667 \frac{\text{mol}_C}{\text{kg}_{HP}} + 29,8954 \frac{\text{mol}_{H_2}}{\text{kg}_{HP}} + 13,125 \frac{\text{mol}_{O_2}}{\text{kg}_{HP}} + 0,357 \frac{\text{mol}_{N_2}}{\text{kg}_{HP}} + 0,2558 \frac{\text{mol}_K}{\text{kg}_{HP}}$$

$$\Rightarrow \Sigma(\nu_{HP,i}) = 85,2999 \frac{\text{mol}_{HP}}{\text{kg}_{HP}}$$

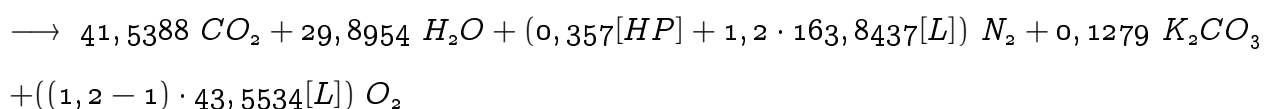
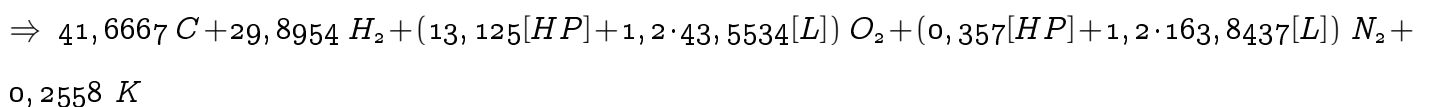
$$\Rightarrow \psi_{HP,C} = \frac{\nu_{HP,C}}{\Sigma(\nu_{HP,i})} = \frac{41,6667 \frac{\text{mol}_C}{\text{kg}_{HP}}}{85,2999 \frac{\text{mol}_{HP}}{\text{kg}_{HP}}} = 0,4885 \frac{\text{mol}_C}{\text{mol}_{HP}} \quad ;$$

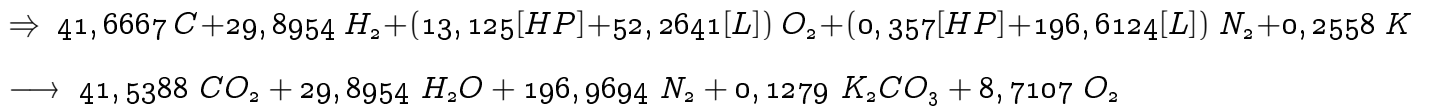
$$\psi_{HP,H_2} = 0,3505 \frac{\text{mol}_{H_2}}{\text{mol}_{HP}} \quad ; \quad \psi_{HP,O_2} = 0,1539 \frac{\text{mol}_{O_2}}{\text{mol}_{HP}} \quad ; \quad \psi_{HP,N_2} = 0,0042 \frac{\text{mol}_{N_2}}{\text{mol}_{HP}} \quad ; \quad \psi_{HP,K} = 0,003 \frac{\text{mol}_K}{\text{mol}_{HP}}$$

$$\Delta^U h_{[pro \ mol]} = \frac{\Delta^U h_{[pro \ kg]}}{\Sigma(\nu_{HP,i})} = \frac{18 \frac{MJ}{\text{kg}_{HP}}}{85,2999 \frac{\text{mol}_{HP}}{\text{kg}_{HP}}} = 211,0202 \frac{MJ}{\text{mol}_{HP}}$$

II. TEILAUFGABE B) \Rightarrow 2 PUNKTE

$$\lambda = 1,2$$





ablesen:

$$\text{Edukte: } \nu_C = 41,6667 \frac{\text{mol}_C}{\text{kg}_{HP}} ; \nu_{H_2} = 29,8954 \frac{\text{mol}_{H_2}}{\text{kg}_{HP}} ; \nu_{O_2} = 13,125 \frac{\text{mol}_{O_2}}{\text{kg}_{HP}} ; \nu_{N_2} = 0,357 \frac{\text{mol}_{N_2}}{\text{kg}_{HP}} ;$$

$$\nu_K = 0,2558 \frac{\text{mol}_K}{\text{kg}_{HP}} ; \nu_{O_2, Luft} = 52,2641 \frac{\text{mol}_{O_2}}{\text{kg}_{HP}} ; \nu_{N_2, Luft} = 196,6124 \frac{\text{mol}_{N_2}}{\text{kg}_{HP}}$$

$$\text{Produkte: } \nu_{CO_2} = 41,5388 \frac{\text{mol}_{CO_2}}{\text{kg}_{HP}} ; \nu_{H_2O} = 29,8954 \frac{\text{mol}_{H_2O}}{\text{kg}_{HP}} ; \nu_{Pottasche} = 0,1279 \frac{\text{mol}_{K_2CO_3}}{\text{kg}_{HP}} ;$$

$$\nu_{O_2, Rest} = 8,7107 \frac{\text{mol}_{O_2}}{\text{kg}_{HP}} ; \nu_{N_2, Rest} = 196,9694 \frac{\text{mol}_{N_2}}{\text{kg}_{HP}}$$

$$\text{Abgase: } \psi_{AG,i} = \frac{\nu_{AG,i}}{\Sigma(\nu_{AG,i})}$$

$$\Sigma(\nu_{AG,i}) = \nu_{AG,CO_2} + \nu_{AG,H_2O} + \nu_{AG,N_2} + \nu_{AG,K_2CO_3} + \nu_{AG,O_2}$$

$$\Rightarrow \Sigma(\nu_{AG,i}) = 41,5388 \frac{\text{mol}_{CO_2}}{\text{kg}_{HP}} + 29,8954 \frac{\text{mol}_{H_2O}}{\text{kg}_{HP}} + 8,7107 \frac{\text{mol}_{O_2}}{\text{kg}_{HP}} + 196,9694 \frac{\text{mol}_{N_2}}{\text{kg}_{HP}} + 0,1279 \frac{\text{mol}_{K_2CO_3}}{\text{kg}_{HP}}$$

$$\Rightarrow \Sigma(\nu_{AG,i}) = 277,2422 \frac{\text{mol}_{AG}}{\text{kg}_{HP}}$$

$$\Rightarrow \psi_{AG,CO_2} = \frac{\nu_{AG,CO_2}}{\Sigma(\nu_{AG,i})} = \frac{41,5388 \frac{\text{mol}_{CO_2}}{\text{kg}_{HP}}}{277,2422 \frac{\text{mol}_{AG}}{\text{kg}_{HP}}} = 0,1498 \frac{\text{mol}_{CO_2}}{\text{mol}_{AG}} ; \psi_{AG,H_2O} = 0,1078 \frac{\text{mol}_{H_2O}}{\text{mol}_{AG}}$$

$$\psi_{AG,N_2} = 0,7105 \frac{\text{mol}_{N_2}}{\text{mol}_{AG}} ; \psi_{AG,K_2CO_3} = 0,0005 \frac{\text{mol}_{K_2CO_3}}{\text{mol}_{AG}} ; \psi_{AG,O_2} = 0,0314 \frac{\text{mol}_{O_2}}{\text{mol}_{AG}}$$

III. TEILAUFGABE C) \Rightarrow 3 PUNKTE

gesucht: t_{max}

$$(Edukte, t_{\Theta}) \xrightarrow{A} (Produkte, t_{\Theta})$$

$$C \Downarrow \qquad \qquad \qquad \Downarrow B$$

$$(Edukte, t_{ein}) \xrightarrow{D} (Produkte, t_{max})$$

$$B = \Sigma(\nu_{P,i} \cdot c_{p,i} |_{t_{\Theta}}^{t_{max}} \cdot (t_{max} - t_{\Theta}) + r_{o,i}) \quad | \quad r_{o,i} = 0$$

$$\Rightarrow t_{max} = \frac{B}{\Sigma(\nu_{P,i} \cdot c_{p,i} |_{t_{\Theta}}^{t_{max}})} + t_{\Theta} \quad \text{mit: } t_{\Theta} = 25^{\circ}C$$

$$A + B = C + D \quad \Rightarrow \quad B = C + D - A$$

$$A = \Delta^R h_{\Theta[\text{pro kg}]}$$

$$\Delta^R h_{\Theta[\text{pro kg}]} = -\Delta^U h_{[\text{pro kg}]} = -18 \frac{\text{MJ}}{\text{kg}_{\text{HP}}} \quad \Rightarrow \quad A = -18 \frac{\text{MJ}}{\text{kg}_{\text{HP}}}$$

$$C = \Sigma(\nu_{E,i} \cdot c_{p,i}|_{t_{\Theta}^{\text{ein}}} \cdot (t_{\text{ein}} - t_{\Theta}) + r_{o,i}) \quad \text{mit: } (t_{\text{ein}} - t_{\Theta}) = 0 \text{ K} \quad \Rightarrow \quad C = 0 \frac{\text{J}}{\text{kg}_{\text{HP}}}$$

$$D = \Delta^R h \quad \Delta^R h = 0 \frac{\text{J}}{\text{kg}_{\text{HP}}} \quad (\text{maximale Temperatur} = \text{adiabater Brenner})$$

$$\Rightarrow D = 0 \frac{\text{J}}{\text{kg}_{\text{HP}}} \quad \Rightarrow B = 18 \frac{\text{MJ}}{\text{kg}_{\text{HP}}}$$

$$\Rightarrow t_{\text{max}} = \frac{B}{\nu_{P,\text{CO}_2} \cdot c_{p,\text{CO}_2}|_{t_{\Theta}^{\text{max}}} + \nu_{P,\text{H}_2\text{O}} \cdot c_{p,\text{H}_2\text{O},(g)}|_{t_{\Theta}^{\text{max}}} + \nu_{P,\text{N}_2} \cdot c_{p,\text{N}_2}|_{t_{\Theta}^{\text{max}}} + \nu_{P,\text{O}_2} \cdot c_{p,\text{O}_2}|_{t_{\Theta}^{\text{max}}}} + t_{\Theta}$$

$$\Rightarrow t_{\text{max}} = \frac{18 \frac{\text{MJ}}{\text{kg}_{\text{HP}}}}{10,4374 \frac{\text{kJ}}{\text{kg}_{\text{HP}} \cdot \text{K}}} + 25^\circ\text{C} = 1749,5674^\circ\text{C}$$

IV. TEILAUFGABE D) \Rightarrow 4 PUNKTE

gesucht: $\Delta^* h$ mit $t_{\text{Abgas}} = 110^\circ\text{C}$

$$(\text{Edukte}, t_{\Theta}) \xrightarrow{A} (\text{Produkte}, t_{\Theta})$$

$$C \Downarrow \quad \quad \quad \Downarrow B^*$$

$$(\text{Edukte}, t_{\text{ein}}) \xrightarrow{D^*} (\text{Produkte}, t_{\text{max}})$$

$$\Delta^* h = D^*$$

$$A + B^* = C + D^* \quad \Rightarrow \quad D^* = A + B^* - C$$

$$B^* = \Sigma(\nu_{P,i} \cdot c_{p,i}|_{t_{\Theta}^{110^\circ\text{C}}} \cdot (110^\circ\text{C} - t_{\Theta}) + r_{o,i})$$

Annahme: Enthalpie der Asche wird vernachlässigt

$$\Rightarrow B^* = (\nu_{P,\text{CO}_2} \cdot c_{p,\text{CO}_2}|_{t_{\Theta}^{110^\circ\text{C}}} + \nu_{P,\text{H}_2\text{O}} \cdot c_{p,\text{H}_2\text{O}}|_{t_{\Theta}^{110^\circ\text{C}}} + \nu_{P,\text{N}_2} \cdot c_{p,\text{N}_2}|_{t_{\Theta}^{110^\circ\text{C}}} + \nu_{P,\text{O}_2} \cdot c_{p,\text{O}_2}|_{t_{\Theta}^{110^\circ\text{C}}}) \cdot (110^\circ\text{C} - t_{\Theta})$$

$$B^* = 9,1926 \frac{\text{kJ}}{\text{kg}_{\text{HP}} \cdot \text{K}} \cdot (110^\circ\text{C} - 25^\circ\text{C}) = 781,3698 \frac{\text{kJ}}{\text{kg}_{\text{HP}}}$$

$$\Rightarrow D^* = -17,2186 \frac{\text{MJ}}{\text{kg}_{\text{HP}}} \quad \Rightarrow \quad \Delta^* h = -17,2186 \frac{\text{MJ}}{\text{kg}_{\text{HP}}}$$